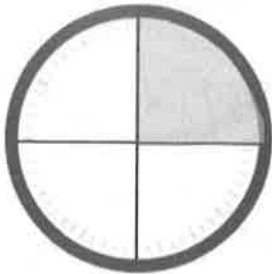
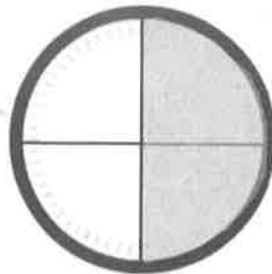



Name _____


Date _____

1. Tell what fraction of each clock is shaded in the space below using the words *quarter*, *quarters*, *half*, or *halves*.









2. Write the time shown on each clock.

a.



b.



c.



d.



3. Match each time to the correct clock by drawing a line.

▪ Quarter to 4



▪ Half past 8



▪ 8:30

▪ 3:45




▪ 1:15

3. Draw the minute hand on the clock to show the correct time.



3:45



11:30



6:15

Name _____

Date _____

Draw the minute hand on the clock to show the correct time.



Half past 7



12:15



A quarter to 3